

KENDRIYA VIDYALAYA, HINJILICUT

PROBABLES FOR MID TERM EXAMINATION 2017-18 /HOLIDAY HOMEWORK FOR AUTUMN BREAK 2017-18

CLASS- III

• MATHEMATICS

I. Answer the following.

1. Indicate the place value of encircled figure.

$$3 \quad \textcircled{4} \quad 2 \quad \underline{\hspace{2cm}}$$

2. Find missing numbers.

$$50, 100, 150, \underline{\hspace{1cm}}, \underline{\hspace{1cm}}, \underline{\hspace{1cm}}.$$

3. $36 - \square = 24$

4. Standard units to measure the liquids is _____.

5. How many months does a year have ? Ans: _____.

II. Do as directed.

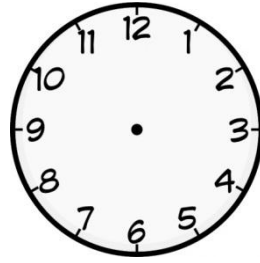

1. Check your answer your self.

$$\begin{array}{r} 3 \quad 8 \quad 4 \\ - 2 \quad 4 \quad 3 \\ \hline \\ \hline \end{array}$$

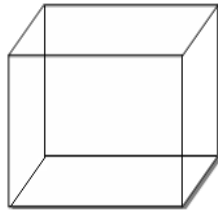
2. Show the hands on the clock for the given time .

6:30

5:15




3. Observe the figure and answer the following?



- a) How many corners does it have _____
- b) How many edges does a cube have _____

4. Draw the top view of a car.



5. Write the place values for the following numbers.

NUMBER	HUNDREDS	TENS	ONES
957			
345			

UNDERSTANDING

1. Answer the following.

1. Mirror half of  is _____.

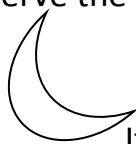
2. 1 hour = _____ minutes . . .

3. What number is missing from the series?

80 75 70 _____ 60 55

4. Length of a sari can be measured in _____.

5. Observe the moon and tick the correct option.



It has Straight edge / Curved edge

II.

Do as directed.

1. Tick the [✓] correct answers.

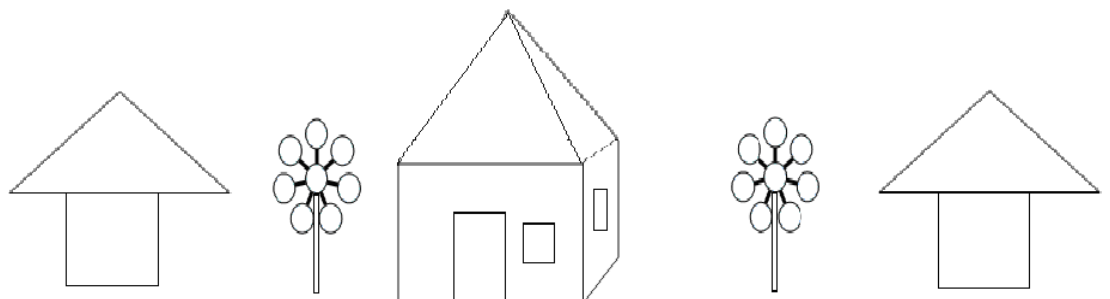
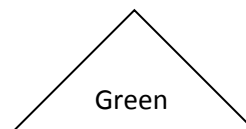

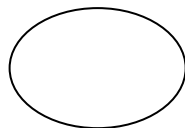
Content	Minutes	Hours	Days
To take your breakfast			
To sleep at night			
A seed to grow			
To be in school			

2. Fill the missing numbers in the given boxes.

7	8
-3	
	5

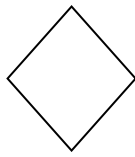
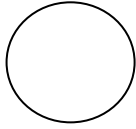
	6
3	
6	0

3. Colour the following.

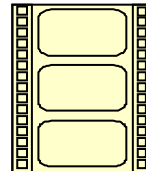
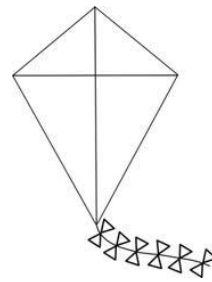




III. Match the following shapes with the designs.

Shapes



Designs



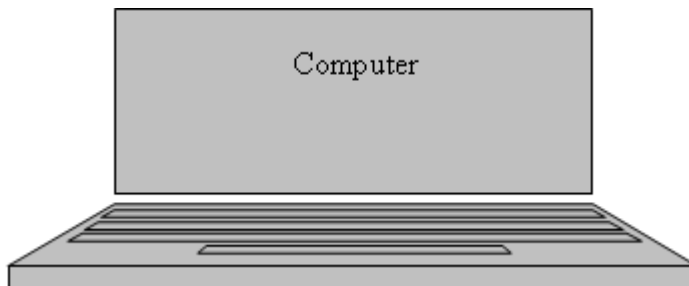
ABILITY TO COMPUTE

I. Answer the following .

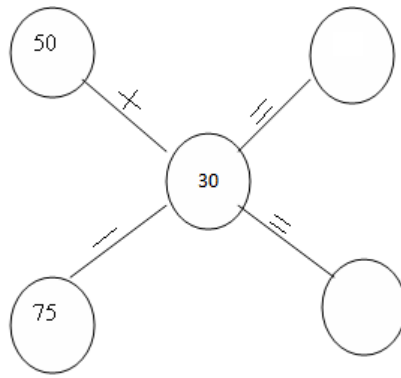
$\begin{array}{r} 345 \\ + 206 \\ \hline \\ \hline \end{array}$	$\begin{array}{r} 658 \\ + 238 \\ \hline \\ \hline \end{array}$	$\begin{array}{r} 503 \\ + 958 \\ \hline \\ \hline \end{array}$
$\begin{array}{r} 595 \\ - 283 \\ \hline \\ \hline \end{array}$	$\begin{array}{r} 968 \\ - 723 \\ \hline \\ \hline \end{array}$	$\begin{array}{r} 856 \\ - 510 \\ \hline \\ \hline \end{array}$

II. Do as directed.

1. Measure the following and answer the questions that follow.



- The length of the computer screen is _____
 - The breadth of the computer screen is _____
- 2. Complete the following circles.**



3. Work out any five different ways to write the numbers.

$$62 = 58 + 4$$

= _____

= _____

= _____

= _____

= _____

4. Hari went on a trip to AGRA. He get down at Agra Chatt , one route map is there along with him . Now look at the map and answer the following questions.

which is farther from Agra Cantt ?

(Taj Mahal / Fatehpur Sikri)



Ans : _____

Which is closer to the river Yamuna?

(Taj Mahal / Railway station)

Ans : _____

III Find the route for the lucky to reach his home . {Use the given instructions}

				
175	99	502	589	417
63	73	111	146	55
99	501	47	32	300
100	235	756	854	36
				

a) Thirty six.

b) $234 + 620$.

c) $65 - 33$.

- d) One hundred forty six.
- e) $456-345$.
- f) $43+10+20$.
- g) $10+20+33$.
- h) $90+85$.

PROBLEM SOLVING ABILITY

I. Answer the following.

1. Drive the odd one out.

9 19 29 39 89

2. I have 3 vertices, 3 sides. Now say who am I _____.

3. The distance from Mumbai to Delhi is about 1400_____. (KM / M / CM)

II. Do as directed.

1. Using dotted lines divide the following alphabets into two similar halves.

H

K

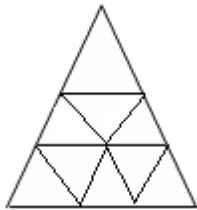
I

M

2. Geeta had Rs.368/- in her purse she brought a bag for Rs.123/-. How much money left in her purse?

3. Sahithi brought a shirt for Rs.125/- and trousers for Rs.165/-.
How much money did she spend altogether?

4. How many triangles are there in the following figure ?



Ans. _____

III. Observe the given calendar and answer the following questions.

September 2011

Sun	Mon	Tue	Wed	Thru	Fri	Sat
				1	2	3
4	5	6	7	8	9	10
11	12	13	14	15	16	17
18	19	20	21	22	23	24
25	26	27	28	29	30	

- On which day does the month end _____
- Write the number of days in the month. _____
- What day is it on 13th _____
- Is the 21st a Sunday _____
- How many Fridays are there in this month _____
- What is the date on Second Saturday _____
- What is the day on the 27th _____ what will be the date on the same day next week _____

- Make a list of 30 objects of your house. Write how many edges and corners do they have.
- Make a calendar of 2018.
- Make a list of DOBs of your family members and mark them on your calendar of 2018.
- Make a list of the grocery budget of your family for a week.
- Draw handprints of your sisters, brothers, cousins in a plain paper and measure them in centimeters.
- Make a list of units of measurement you have known.
- Draw any tile pattern of your house and colour it.

- ENGLISH

Q.1- Read the following passage. Answer the following questions in one word or one sentence.

Sonu loved the little butterfly. It was so pretty. It had brown spots on its yellow wings. But it looked sad in Sonu's hand. Sonu wanted it to be happy. "Go," said Sonu, "fly away!".

He let the butterfly go. It sat on the red rose. It flew to the peach tree and then sailed on a lotus leaf. It flew merrily from flower to flower.

i) Who loved the little butterfly?

ii) Who was so pretty?

iii) Which colour spots did the butterfly have?

iv) Who was having yellow colour wings?

v) Who looked sad in Sonu's hand?

vi) Which flower mentioned in the passage?

vii) What is the name of the tree in the passage?

viii) Butterfly sailed on _____

ix) What is the past tense of the word

want _____

x) Write the opposite of the word

happy x _____

Q.2- - Read the following passage. Answer the following questions in one word or one sentence.

Father: Salim, why are you wearing sherwani to school today?

Salim: We are doing a play on Chacha Nehru, today. Today is 14th November and we are going to stage a play on Chacha Nehru. Nehru was fond of children. so, we celebrate this day as children's day. We call him as Chacha.

Ahmed: I am going to play the role of Gandhi. Gandhi was called 'Bapu'. The father of Nation.

i) Who is going to play the role of Nehru?

ii) Who is going to play the role of Gandhi?

iii) Who is wearing Sherwani?

iv) Who are going to stage a play?

v) Where they are playing a stage?

vi) Whose birthday is going to be celebrated?

vii) On which day we celebrate Chacha's birthday?

viii) Who is known as Chacha?

ix) Who was fond of children?

x) Who is known as father of Nation?

WRITING

Answer any 5 of the following questions.

1) What things does a seed need to grow?

2) Who helped the old man to pull up the enormous turnip?

3) Where did the child find the sea shell?

4) Why was the little fish unhappy?

5) Where does the balloon man stand?

6) Why was Nina worried?

7) What do birds think of people?

GRAMMAR

Do as directed .

a) Write the plurals of the following:

1. Balloon = _____ 2. Tomato = _____

b) Write the pas tense of the following:

1. Pick= _____ 2. help = _____

c) Fill in the blanks with the right word from the box.

1. A glass of _____

2. A bunch of _____

3. A herd of _____

Flowers

Water

Cows

d) Write the opposites of the following.

1. Sit x _____

2. Up x _____


e) Choose the odd man and encircle it. One has been done for you

Ex. Pen, pencil, sketch, water bottle
Turnip, Tomato, Parrot, Radish

CREATIVE WRITING

a) Write a few sentences about your school.

b) Look at the picture and write five sentences about it.



SPELLING

1) Re-arrange the following word to make a meaningful word.

a. Ulbe = _____

b. Cuhln = _____

2) Make two words from one word

a. In side _____

b. sunlight _____

c. goodmorning _____

HANDWRITING

Copy the following neatly .

Unity is strength. As long as we are united, we can solve any problem. The moment we get separated, we become weak. Tagore also said that the world should not be divided into fragments, but should be treated as a single unit.

1. Why is the child in the poem happy?

2. Why do the flowers and the birds love the little children?
3. What do birds think of people?
4. What had happened at the end in Nina's house?
5. What are the gifts trees give to us?
6. How did the enormous turnip come out?
7. What would you do if you find a shell?
8. How did the little body of the little fish become a boon for him?
9. What does the child like to see the balloon man do?
10. Why did Sonu let the butterfly go?
11. What do the trains carry?
12. What sounds could be typically heard on a road?
13. Make a list of birds and their sounds.
14. Stick a flower on a plain paper which you like the most.

- EVS

5 marks questions: -

1. How do animals move? Give two examples from each move.
2. Write any 3 important parts of a tree. Write their works.
3. Draw a plant and label its parts.
4. Draw any 5 types of water container.
5. Draw a Rangoli?
6. Write 3 food items made from wheat and rice.
7. Name 5 sense organs and write their works.
8. Draw a rainbow and colour it.
9. Write 5 activities you do using water.
10. Write 5 activities you do without using water.
11. Name 5 sources of water.
12. Draw 5 utensils you use at your house.
13. Draw 2 vehicles and colour them.
14. Write 5 works you do at your home.
15. Write 5 sentences about Braille script.

2 marks questions: -

1. Name 4 animals that live on land.
2. Name any 2 animals and write the sound they make.
3. Write the name of any 2 members of your family. Write their relation with you.
4. Who do you resemble in your family? How?
5. How can we decorate our house? (any 4 decorative things)

6. What do you eat in your breakfast/ lunch/ dinner?
7. Name 4 food items we get from animals/ tree?
8. Draw any 2 expressions. (ex- happy, sad, angry, surprised, crying etc)
9. Name 2 birds who can fly very high and who cannot fly.
10. Why did appu need water?
11. How many forms of water are there? What are they?
12. Name 2 food items made by- boiling, frying, baking.
13. Name two vehicles which use fuel to run and which don't?
14. Name two vehicles having 4 wheels and more than 4 wheels.
15. Name the workers associated with the following: -
School, hospital, post-office, police station
16. Name the places of worship.
17. What works do you do in your house?
18. With whom do you share your feelings?
19. Name 2 big tree and 2 small plants.
20. What kind of problems do old people have?

- HINDI

-

पठन

- बहुत समय पहले की बात है । एक बूढ़ी अम्मा थी । बिल्कुल अकेली ! उसका अपना कोई न था । घर का कामकाज उसे खुद ही करना पड़ता । सुबह उठकर कुएँ से पानी लाना, खाना बनाना आदि । उसके साथ एक परेशानी थी । वह रोज़ सुबह उठकर जब घर में झाड़ू लगाती तब तक तो सब ठीक रहता पर जैसे ही वह आँगन में जाती और झाड़ू लगाने के लिए झुकती , तभी आसमान आकर उसकी कमर से टकराता ।

- निम्न प्रश्नों के उत्तर लिखो । (10*1)

- १. बूढ़ी अम्मा कहाँ से पानी लाती थी ?

-

-

_____ २. बूढ़ी अम्मा किस के साथ रहती थी ?

-

-

_____ ३. घर का सारा कामकाज कौन करता था ?

-

-

_____ ४. सुबह उठकर वह पहले क्या करती थी?

-

-

_____ ५. उसकी कमर से कौन टकराता ?

६. खाली स्थान भरों.

जैसे वह आँगन में जाती और _____ लगाने के लिए जुकती ।

७. अनुच्छेद से एक काम वाला शब्द लिखिए ।

१. _____

८. अनुच्छेद से एक नाम वाला शब्द लिखिए ।

१ _____

९. विलोम शब्द लिखो

बुढ़िया _____

१०. आप इस गद्यांश का क्या शीर्षक देंगे ।

निम्न अपठित अनुच्छेद को पढ़कर प्रश्नों के सही उत्तर पर _____ का निशाना लगाइए । (10*1)

घोड़ा एक समझदार और ताकतवर जानवर है । पुराने समय में राजा – महाराजा इस पर घुड़सवारी किया करते थे । यात्रा के लिए रथों में इनका प्रयोग होता था । महाराणा प्रताप का घोड़ा चेतक ,जो इतिहास प्रसिद्ध है ,वायू से भी तेज़ चलता था । आज घोड़े का प्रयोग अधिकतर तांगा चलाने में किया जाता है ।

१. घोड़ा कैसा जानवर है ?

समझदार () बेवकूफ़ ()

२. पुराने समय में यात्रा के लिए किसका प्रयोग किया जाता था ?

शेर () घोड़ा ()

३. महाराणा प्रताप के घोड़े का नाम क्या था ?

बित्तो () चेतक ()

४. आज घोड़े का प्रयोग किस रूप में किया जाता है ?

तांगा () हवाई जहाज़ ()

५. चेतक कितना तेज़ चलता था ?

मेघ () हवा ()

६. घोड़े का एकवचन क्या है?

घोड़ी () घोड़ा ()

७. घोड़ी का पुल्लिंग क्या है ?

घोड़े () घोड़ा ()

८. पुराने समय में राजा- महाराजा किस पर सवारी करते थे ?

गधे () घोड़े ()

९. घोड़ा कैसा जानवर है?

कमज़ोर () ताकतवर ()

१०. क्या आपको घुड़सवारी पसंद है ?

हाँ () ना ()

• लिखना गद्य/पद्य

• नीचे दिए गए प्रश्नों के उत्तर लिखिए | (5*1)

•

• १. तुम्हारे घर में तुम्हें कौन-कौन टोकता रहता है ?

•

• २. कहानी में टिपटिपवा कौन था?

•

• ३. दोनो बिल्लियों के बीच झगड़े की जड़ क्या थी?

•

• ४. उनके झगड़े का हल कैसे निकल गया ?

•

• ५. तुम्हें शेखीबाज मक्खी कहानी में कौन सबसे अच्छा लगा ?

•

• ६. कविता की पंक्तियाँ पूरी करो : (5*2)

• कोयल, माने _____ जैसी

• मीठी जिसकी बोली

• यह तो जाता _____, करो जब

• इससे तनिक _____

• ७. अगर तुम्हें इस कविता का नाम बदलने को कहें, तो तुम इसे क्या नाम दोगे?

•

• ८. खूँटे से क्या-क्या बांधा जाता है ?

- _____
- _____
- _____

• ९. चाँद वाली अम्मा झाड़ू क्यों नहीं छोड़ना चाहती थी ?

- _____
- _____
- _____

• १०. बैल की जान कैसे बच गई ?

- _____
- _____
- _____

• व्याकरण

- १) लिंग बदलो
- राजा _____ दादा _____
- घोड़ा _____ लड़का _____ (2)
- २) वचन बदलो
- बच्चा _____ सखी _____
- लड़की _____ तितली _____ (2)
- ३) विलोम शब्द
- भीतर _____ शत्रु _____ (2)
- ४) पर्यायवाची शब्द लिखो
- आकाश _____ _____ _____ (2)
- ५) मुहावरे का अर्थ लिखिए
- भीगी बिल्ली होना _____ (2)
- ६) मात्रा लगाकर शब्द बनाइए
- ग जर प लक मल ल क (2)

- ७) संज्ञा किसे कहते हैं ? (3)

- _____
- _____
- _____
- _____

- सृजनात्मक लेखन

- क) शेर पर पाँच वाक्य लिखो । (5)

- _____
- _____
- _____
- _____
- _____
- _____
- _____
- _____
- _____

—

- ख) अपने शब्दों में लिखो तुम किन-किन चीज़ों के लिए मचलते हो ? (5)

- _____
- _____
- _____
- _____
- _____
- _____

•

•

- ग) चार दिन के अवकाश के लिए प्रधानाचार्य को प्रार्थना पत्र लिखिए । (5)

- _____
- _____

- सुलेख

- नीचे लिखे अनुच्छेद को सुंदर लिखावट में लिखो ।
- गंगा नदी भारत की प्राचीन नदियों में से एक है और इसका अपना एक इतिहास है । यह नदी सब भारतियों की एक आस्था का भी प्रतीक माना जाता है इसलिए यह सिर्फ एक नदी नहीं है । यह नदी हिमालय की गोद से निकल कर मैदानी इलाकों में आती है ।

(5)

- ---

-